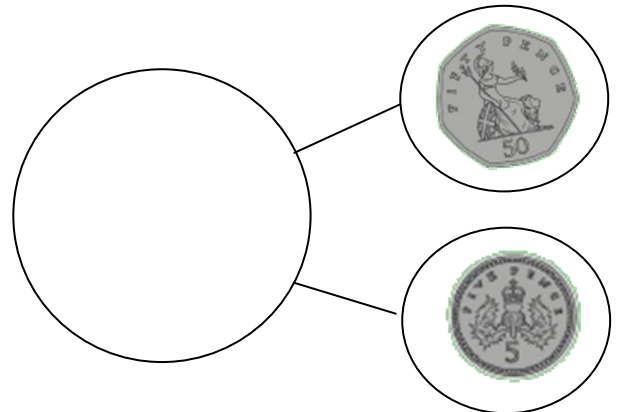


- L.O. recognise and use symbol for pence (p)

18.11.2021

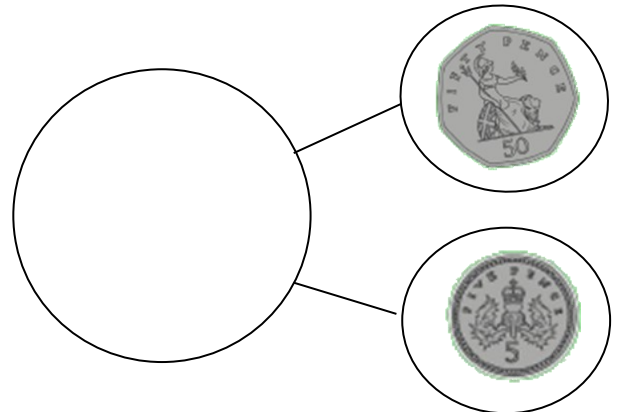


Use < > =



+ L.O. recognise and use symbol for pence (p)

18.11.2021




Use < > =



LO: To problem solve with money

18.11.2021

Jamie selects four of these coins.



He can use the coins more than once.

What total could he make?


What is the lowest total?

What is the greatest total?

LO: To problem solve with money

18.11.2021

Jamie selects four of these coins.



He can use the coins more than once.

What total could he make?

What is the lowest total?

What is the greatest total?