

18.11.21

LO: To recognise and know the value of coins and notes.

Get ready -

Let's practice counting in 2s, 5s and 10s.

Use your fingers to help you.

LO: To recognise and know the value of coins and notes.

What values of coins and notes do we have here?
How could you describe each one?



smallest value \longrightarrow largest value

LO: To recognise and know the value of coins and notes.

Match the coin to its value



1p



2p



20p



5p



£1



£2



10p



50p

LO: To recognise and know the value of coins and notes.

Place each coin onto the 100 square. What do you notice?



1	2	3	4	5	6	7	8	9	10
11	12	13	14	15	16	17	18	19	20
21	22	23	24	25	26	27	28	29	30
31	32	33	34	35	36	37	38	39	40
41	42	43	44	45	46	47	48	49	50
51	52	53	54	55	56	57	58	59	60
61	62	63	64	65	66	67	68	69	70
71	72	73	74	75	76	77	78	79	80
81	82	83	84	85	86	87	88	89	90
91	92	93	94	95	96	97	98	99	100

LO: To recognise and know the value of coins and notes.

Steps to success

- Cut out the coins and notes carefully.
- Stick them down your page from smallest to largest in value.
- Write next to each coin and note how much they are worth - 1p, £5 etc.

p £

18.11.2021

L.O. To recognise and use the symbol for
pence (p)

How many pennies in....




L.O. recognise and use symbols for pence (p.)



L.O. recognise and use symbols for pence (p)

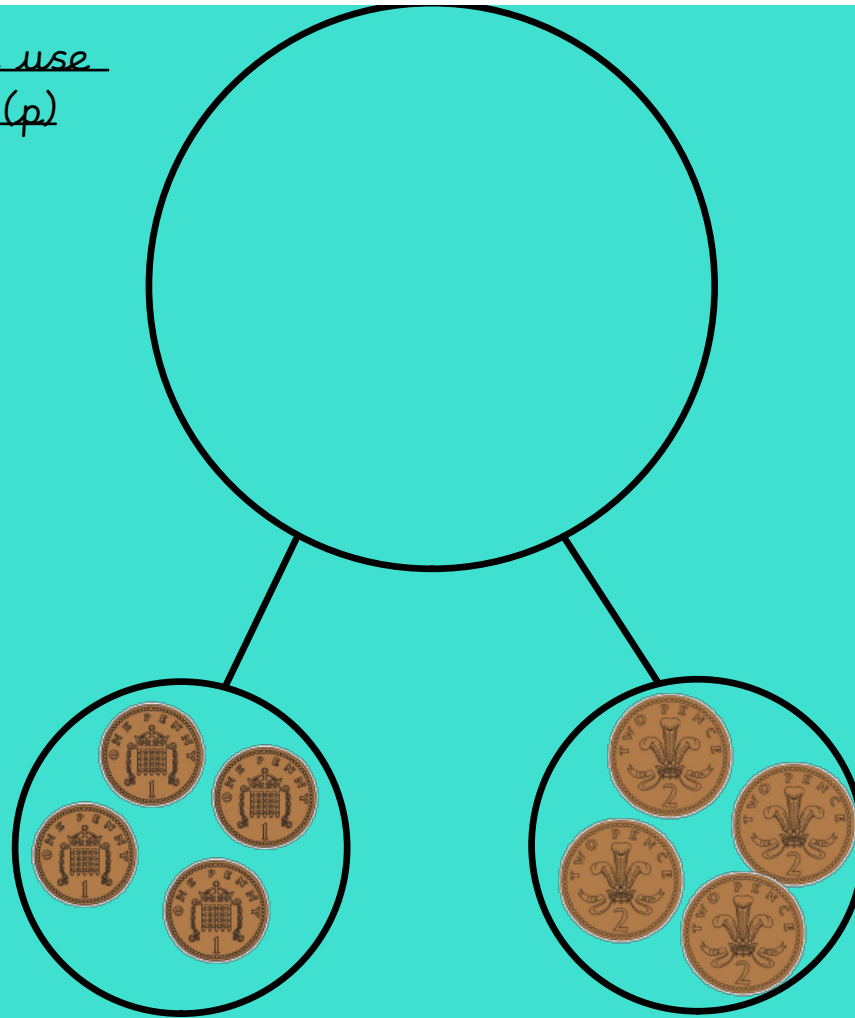


L.O. recognise and use symbols for pence (p)



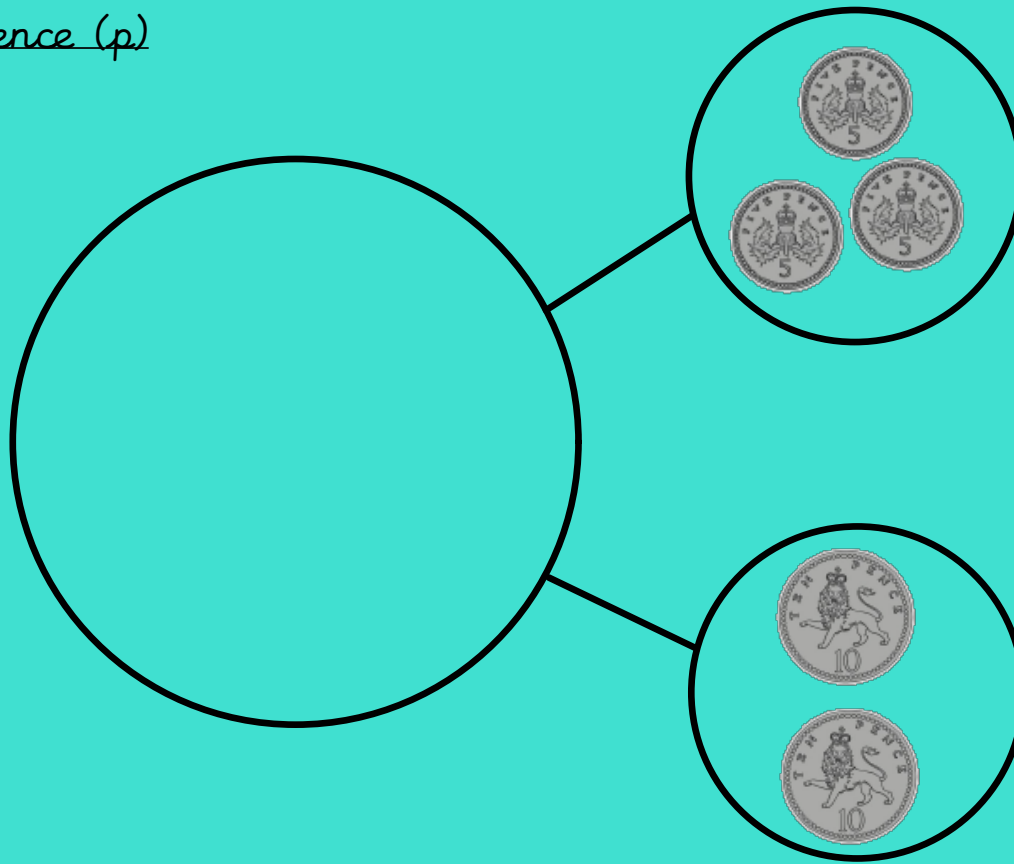
L.O. recognise and use
symbols for pence (p)

What is our
whole
amount of
money?




L.O. recognise and use
symbols for pence (p)

How much
money do
we have in
total?




L.O. recognise and use symbols for pence (p)

Which coin or coins might complete the bar model?





L.O. recognise and use symbols for pence (p)

Which coin could fill the gap?





L.O. recognise and use symbols for pence (p)

< = >



L.O. recognise and use symbols for pence (p)

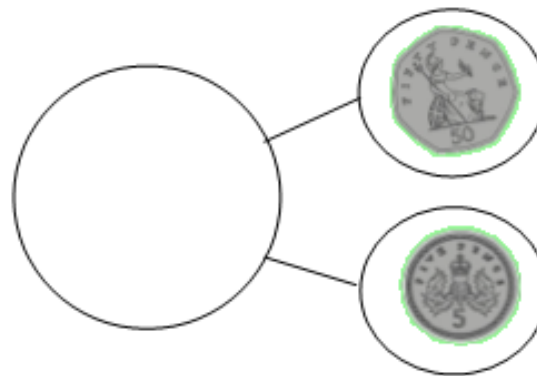
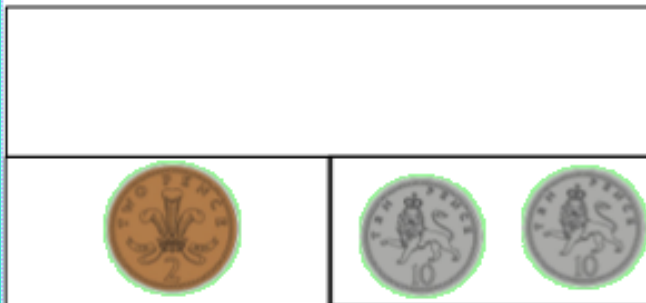
< = >



L.O. recognise and use symbols for pence (p)

- L.O. recognise and use symbol for pence (p)

18.11.2021



Don't forget to write the pence symbol after each number

L.O. recognise and use symbols for pence (p)

Use < > =

Four 2p coins 10p coin

Five 10p coins 50p coin

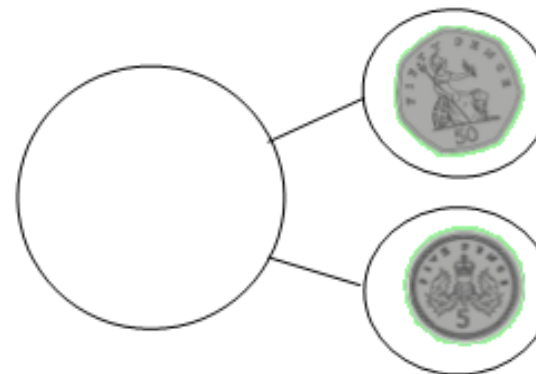
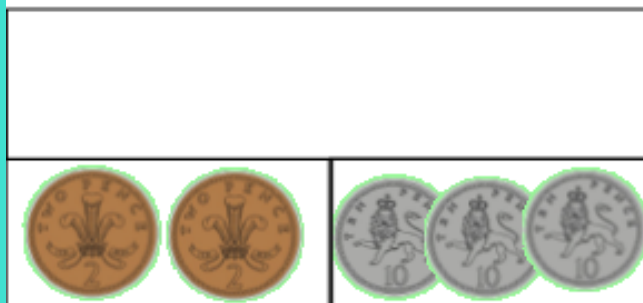
20p coin Four 1p coins

Don't forget to write the pence symbol after each number

L.O. recognise and use symbols for pence (p)



+ L.O. recognise and use symbol for pence (p)



18.11.2021





L.O. recognise and use symbols for pence (p)

Use < > =

L.O. recognise and use symbols for pence (p)

LO: To problem solve with money 18.11.2021

Jamie selects four of these coins.



He can use the coins more than once.

What total could he make?

What is the lowest total?

What is the greatest total?

19.11.2021

L.O. recognise and use symbols for pounds
and pence (p and £)

Get ready -

Let's practice counting in 2s, 5s and 10s.

Use your fingers to help you.

L.O. recognise and use symbols for pounds and pence (p and £)

- 10

+ 10



10p less	amount	10p more

L.O. recognise and use symbols for pounds and pence (p and £)



How many pennies in....



L.O. recognise and use symbols for pounds and pence (p and £)

L.O. recognise and use symbols for pounds and pence (p and £)



£



pounds




How many pennies in....

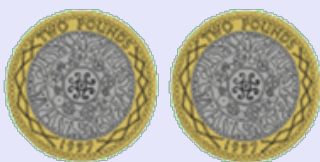

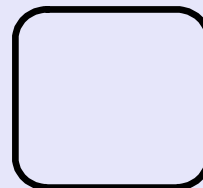


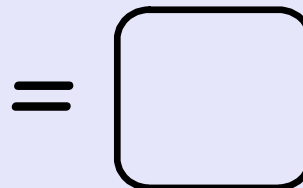





L.O. recognise and use symbols for pounds and pence (p and £)

L.O. recognise and use symbols for pounds and pence (p and £)


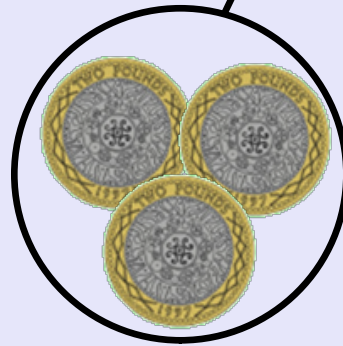


L.O. recognise and use symbols for pounds and pence (p and £)




L.O. recognise and use symbols for pounds (£)

What is the total value of the coins?




L.O. recognise and use symbols for pounds and pence (p and £)

Complete the bar model




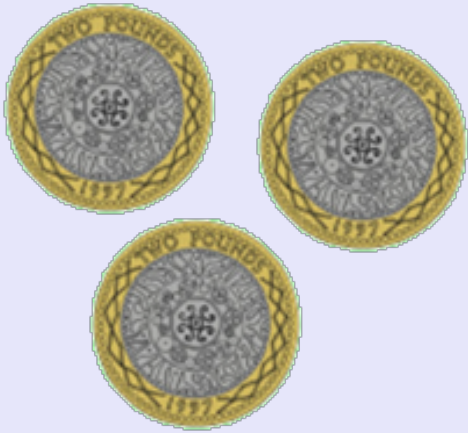
L.O. recognise and use symbols for pounds (£)

Complete the bar model



L.O. recognise and use symbols for pounds (£)


Use < > =



L.O. recognise and use symbols for pounds (£)




Use < > =



L.O. recognise and use symbols for pounds (£)

Match the pound values...which is the odd one out?



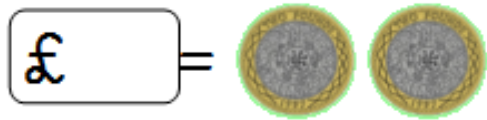
£25

£60

£10

L.O. recognise and use symbols for pounds and pence (p and £)

- L.O. recognise and use symbol for pounds (£) 19.11.2021



Don't forget the pound symbol before the number!



L.O. recognise and use symbols for pounds and pence (p and £)

Use < > =

Don't forget the pound symbol before the number!

L.O. recognise and use symbols for pounds and pence (p and £)

+ L.O. recognise and use symbol for pounds (£) 19.11.2021



L.O. recognise and use symbols for pounds and pence (p and £)

Use < > =

L.O. recognise and use symbols for pounds and pence (p and £)

Dan thinks he has £13.



Is he correct?
Explain why.

The image shows a hand holding a £10 banknote and three 2p coins. The text asks if the total value is £13 and requests an explanation.

L.O. recognise and use symbols for pounds (£)

Extra for chn who have finished work

Alex selects four of these coins



How many different totals can he make?

Write the number sentences and the answer on a whiteboard.