

LO: To learn the Egyptian numeral system

Match the numbers to the correct ancient Egyptian symbol.

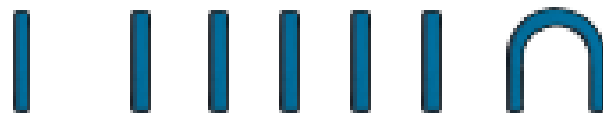
1

5

10

100

1000



Write the numbers using ancient Egyptian symbols.

6

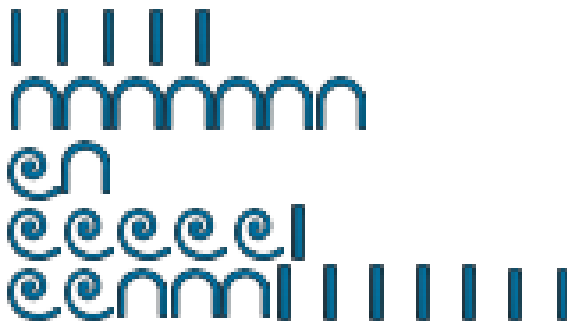
12

20

120

600

Translate the ancient Egyptian numbers.



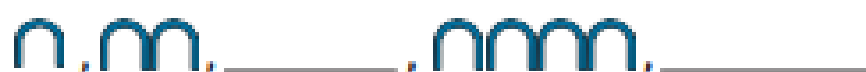
Translate and solve the ancient Egyptian calculations.

$$\begin{aligned} & \text{II} + \text{n} = \\ & \text{mi} + \text{n} = \\ & \text{mmm} + \text{n} = \end{aligned}$$

Arrange the ancient Egyptian numbers in size order, from smallest to largest.




Complete the ancient Egyptian number sequence.



LO: To learn the Egyptian numeral system

Match the numbers to the correct ancient Egyptian symbols.

60
150
8
10 001
1200



Write the numbers using ancient Egyptian symbols.

50	_____	1521	_____
260	_____	10 100	_____
444	_____		

Translate the ancient Egyptian numbers.

Translate and solve the ancient Egyptian calculations.

+ =
 + =
 + =

Arrange the ancient Egyptian numbers in size order, from smallest to largest.

, , ,

Complete the ancient Egyptian number sequences.

, , _____ ,
 , , _____ ,

LO: To learn the Egyptian numeral system

Match the numbers to the correct ancient Egyptian symbols.

1 111 111

10 001

50

100 005

95

1489

132



Write the numbers using ancient Egyptian symbols.

20

1562

230

10 400

439

Translate the ancient Egyptian numbers.



Translate and solve the ancient Egyptian calculations.

$1000 + 100 =$

$1000 + 1000 =$

$1000 + 1 =$

Arrange the ancient Egyptian numbers in size order, from smallest to largest.



Complete the ancient Egyptian number sequences.

