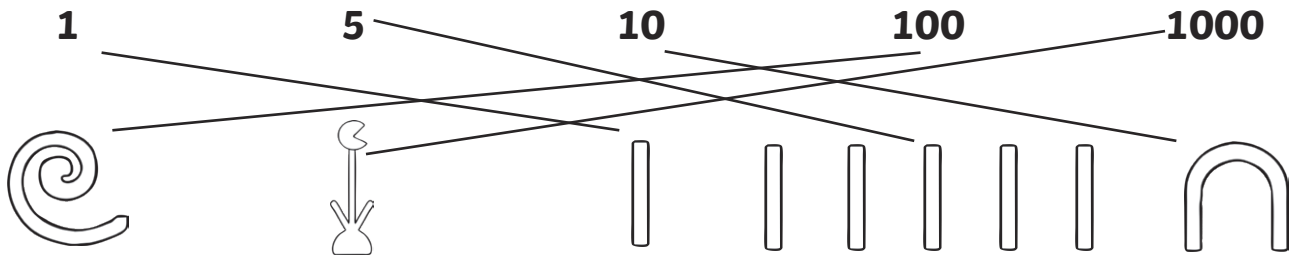
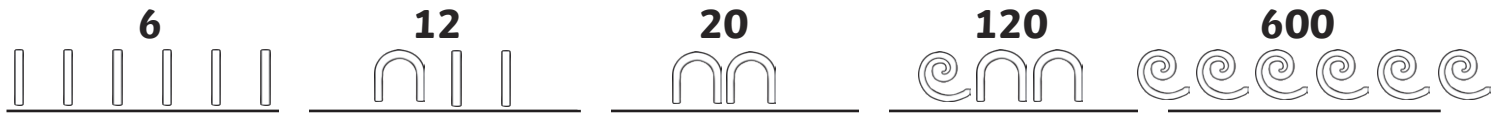


Ancient Egyptian Number System Answers

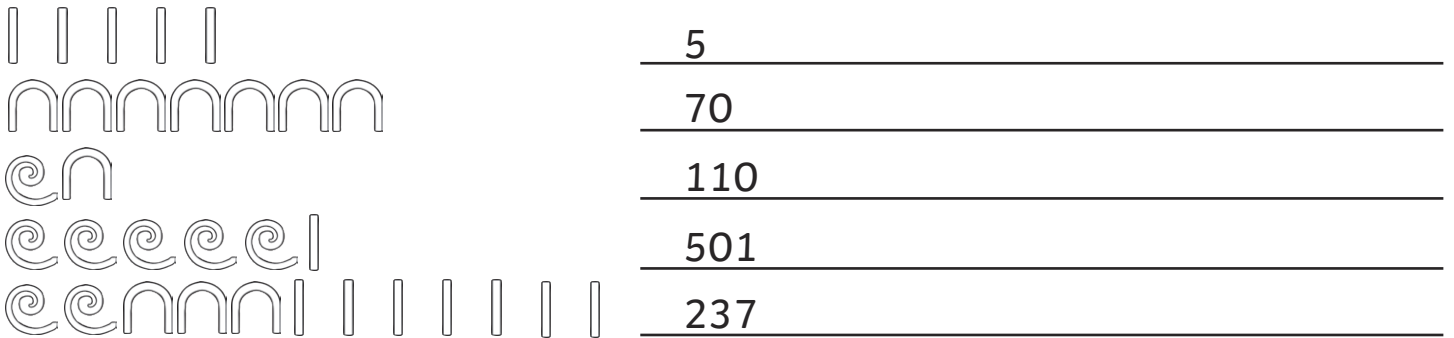
Match the numbers to the correct ancient Egyptian symbol.



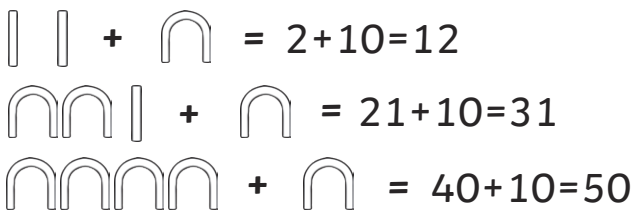
Write the numbers using ancient Egyptian symbols.



Translate the ancient Egyptian numbers.



Translate and solve the ancient Egyptian calculations.



Arrange the ancient Egyptian numbers in size order, from smallest to largest.













Complete the ancient Egyptian number sequences.








Ancient Egyptian Number System Answers






Match the numbers to the correct ancient Egyptian symbols.

60		
150		
8		
10 001		
1200		

Write the numbers using ancient Egyptian symbols.

50		1521	
260		10 100	
444			




Translate the ancient Egyptian numbers.

	<u>63</u>
	<u>540</u>
	<u>1112</u>
	<u>10,310</u>
	<u>20,220</u>

Translate and solve the ancient Egyptian calculations.

$$\begin{aligned} \text{nn} \text{||} + \text{nnnn} &= 22 + 30 = 52 \\ \text{eenn} + \text{nn} &= 220 + 20 = 240 \\ \text{eeeen} + \text{ee} &= 410 + 200 = 610 \end{aligned}$$

Arrange the ancient Egyptian numbers in size order, from smallest to largest.

 ,  ,  , 

4, 20, 102, 130

Complete the ancient Egyptian number sequences.

 , 50 ,  , 70 ,

 , 300 ,  , 500 ,

