

# Ancient Egyptian Number System

Match the numbers to the correct ancient Egyptian symbol.

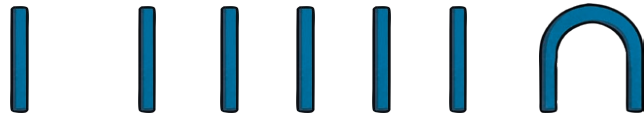
1

5

10

100

1000



Write the numbers using ancient Egyptian symbols.

6

12

20

120

600

\_\_\_\_\_

Translate the ancient Egyptian numbers.



\_\_\_\_\_

\_\_\_\_\_

\_\_\_\_\_

\_\_\_\_\_

Translate and solve the ancient Egyptian calculations.

$$|| + \cap =$$

$$\cap\cap| + \cap =$$

$$\cap\cap\cap + \cap =$$

Arrange the ancient Egyptian numbers in size order, from smallest to largest.



,



,



,

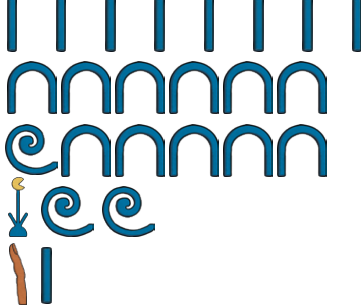


Complete the ancient Egyptian number sequence.

$\cap, \cap\cap, \underline{\hspace{2cm}}, \cap\cap\cap, \underline{\hspace{2cm}}$

# Ancient Egyptian Number System



Match the numbers to the correct ancient Egyptian symbols.

60	
150	
8	
10 001	
1200	







Write the numbers using ancient Egyptian symbols.

50	_____	1521	_____
260	_____	10 100	_____
444	_____		

Translate the ancient Egyptian numbers.

	_____
	_____
	_____
	_____
	_____

Translate and solve the ancient Egyptian calculations.

 +  =  
 +  =  
 +  =

Arrange the ancient Egyptian numbers in size order, from smallest to largest.

 ,  ,  , 

Complete the ancient Egyptian number sequences.

 ,  , \_\_\_\_\_ ,  
 ,  , \_\_\_\_\_ ,

# Ancient Egyptian Number System

Match the numbers to the correct ancient Egyptian symbols.

1 111 111



10 001



50



100 005



95



1489



132



Write the numbers using ancient Egyptian symbols.

20

\_\_\_\_\_

1562

\_\_\_\_\_

230

\_\_\_\_\_

10 400

\_\_\_\_\_

439

\_\_\_\_\_

Translate the ancient Egyptian numbers.



\_\_\_\_\_



\_\_\_\_\_



\_\_\_\_\_



\_\_\_\_\_



\_\_\_\_\_

Translate and solve the ancient Egyptian calculations.



Arrange the ancient Egyptian numbers in size order, from smallest to largest.



Complete the ancient Egyptian number sequences.

