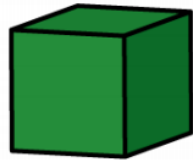
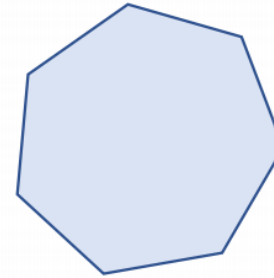


These shapes are both squares.



I think it is _____ because

This shape is an octagon.

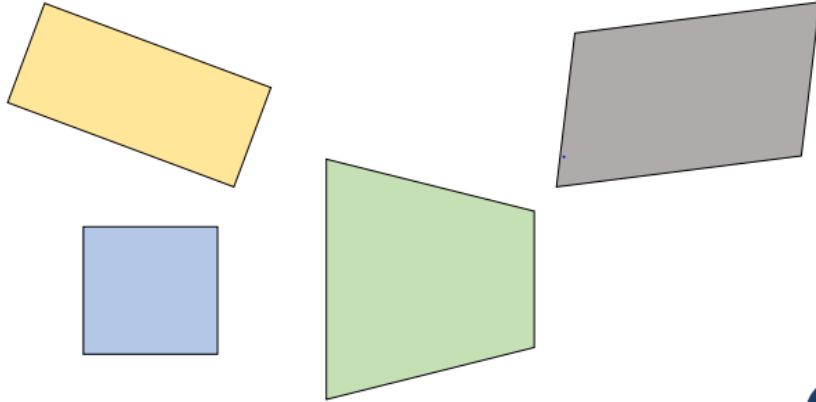


I think it is _____ because

True or False ?

Count vertices on 2-D shapes

All of these shapes have 4 vertices.




I think it is _____ because

True or False ?

Draw 2-D shapes

I can draw two identical rectangles on the geoboard.



I think it is _____ because
