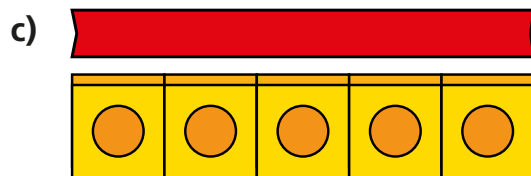
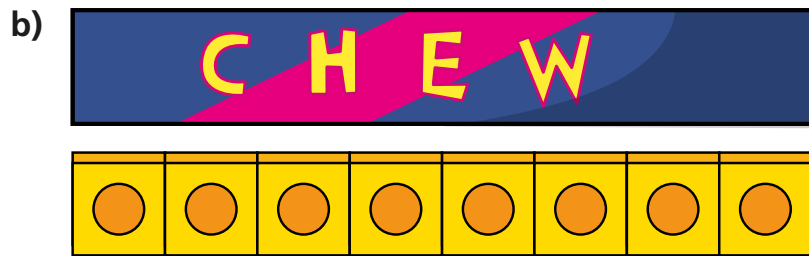
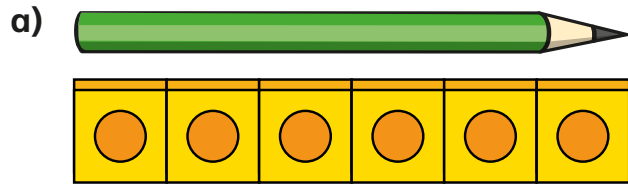



1 How many cubes long is each object?



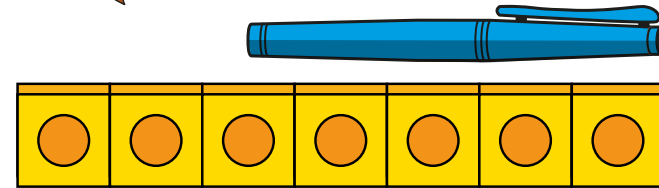
d) Use cubes to measure some objects in your classroom.



2




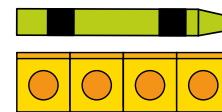
The pen is 7 cubes long.



Do you agree with Rosie?
Talk about it with a partner.



3 Tommy is measuring objects.




The car and the crayon are the same length.

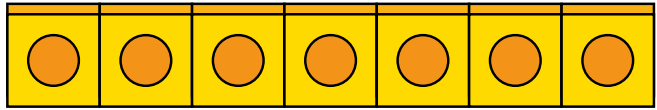
Do you agree with Tommy?



2




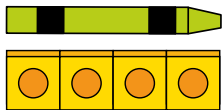
The pen is 7 cubes long.



Do you agree with Rosie?
Talk about it with a partner.



3 Tommy is measuring objects.



The car and the crayon are the same length.

Do you agree with Tommy?



4

Measure objects in your classroom with these items.

- cubes
- hands
- sticks

Which object is the longest?

Which is the shortest?

How do you know?

