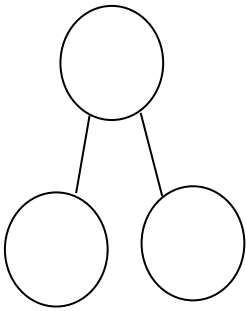
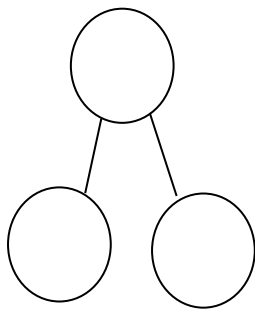


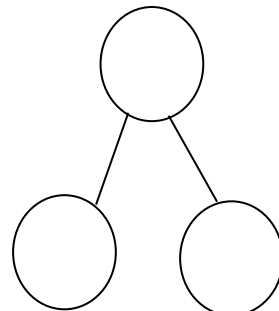
LO: To find and make number bonds to 20 using WPP models and tens frames 18.01.21



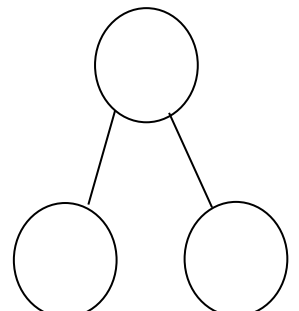
$$\square + \square = \square$$



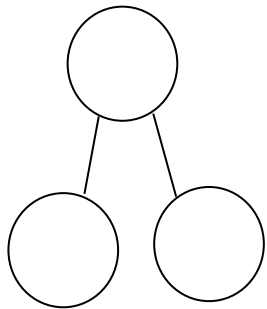
$$\square + \square = \square$$



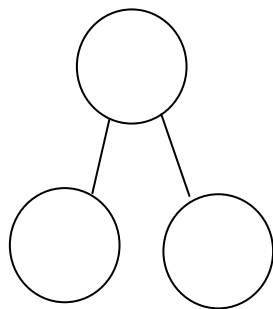
$$\square + \square = \square$$



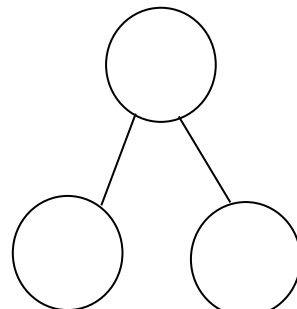
$$\square + \square = \square$$



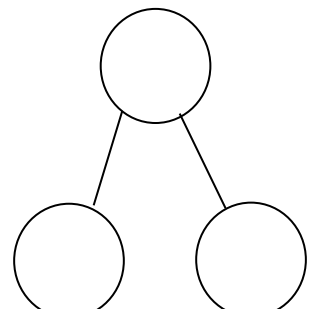
$$\square + \square = \square$$



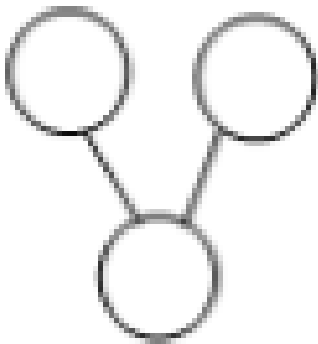
$$\square + \square = \square$$



$$\square + \square = \square$$



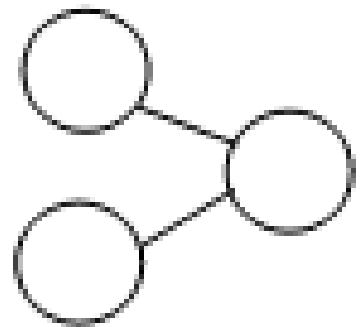
$$\square + \square = \square$$



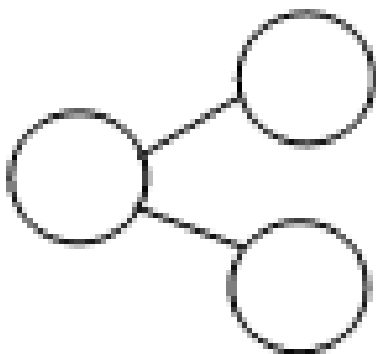
$$\square + \square = \square$$



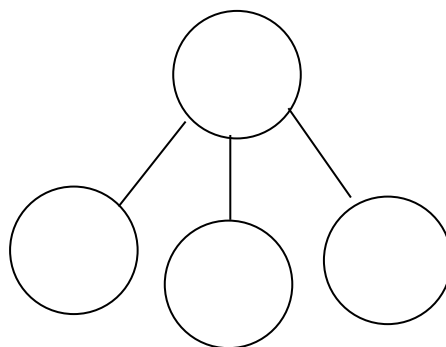
$$\square + \square = \square$$



$$\square + \square = \square$$



$$\square + \square = \square$$



Challenge—Can you write a number sentence for this model?