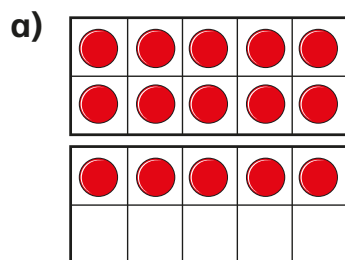
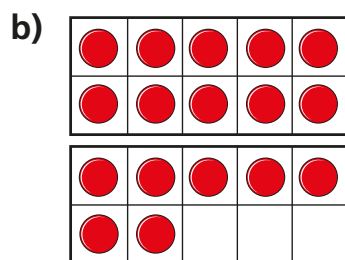


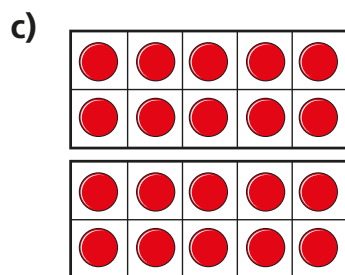
**1** Cross out counters to work out the subtractions.



$$15 - 4 = \square$$

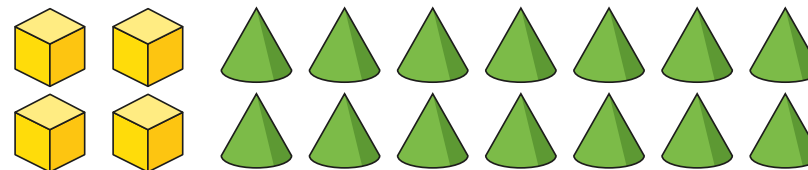


$$17 - 5 = \square$$



$$\square = 20 - 3$$

**2** Teddy has these shapes.



He gives Eva 3 cones.

How many cones does Teddy have left?

**3** Complete the subtractions.

a)  $13 - 2 = \square$

c)  $15 - 4 = \square$

b)  $14 - 3 = \square$

d)  $16 - 5 = \square$

What do you notice?

Use this to fill in the missing numbers.

$$17 - \square = 11$$

$$19 - \square = 11$$

