

Tuesday 5th January 2021



What do you notice?

Prompts: colours, number of pieces, number of dots on each piece of lego,  $2 + 2 = 4$ , each piece is square, 3 rows of 4 makes a rectangle.

Tuesday 5th January 2021



Count from 0 - 10. Count back from 10- 0.

I am thinking of a number:

One more than 3 is \_\_\_\_\_

One more than 5 is \_\_\_\_\_

One more than 1 is \_\_\_\_\_

One less than 3 is \_\_\_\_\_

One less than 6 is \_\_\_\_\_

One less than 2 is \_\_\_\_\_

Tuesday 5th January 2021

Match the numerals to the quantities.



5

6

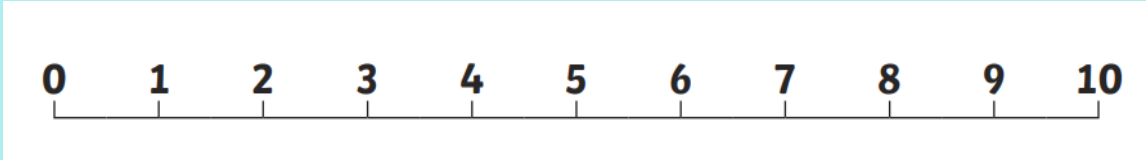
2

4

8

Which dinosaurs have the most? Which have the least?

Tuesday 5th January 2021



Use the clues to find out our special number...

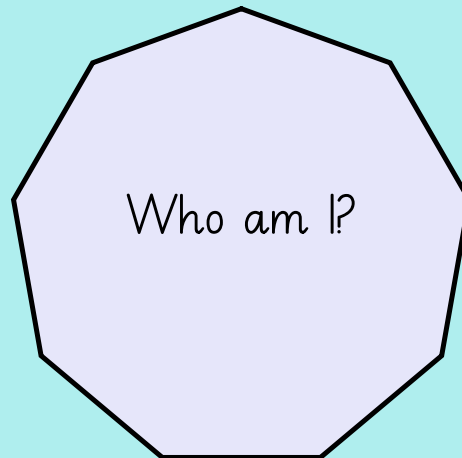
(eliminate numbers as you work through clues)

I am more than 5.

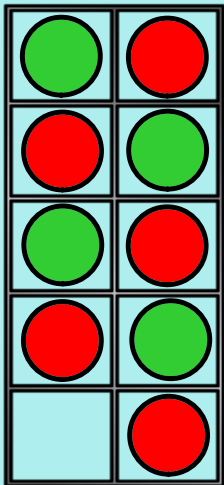


I am less than 10.

I am more than 7.

I am one less than 10.




Tuesday 5th January 2021



Tuesday 5th January 2021


<https://www.bbc.co.uk/iplayer/episode/b08phbzc/numberblocks-series-2-nine>



What is happening here? What do you know?

Tuesday 5th January 2021

<https://www.bbc.co.uk/iplayer/episode/b08phbzc/numberblocks-series-2-nine>






What is happening here? What do you know?

Tuesday 5th January 2021

Count to 9 - practical.

Count 9 toys

Show 9 fingers





Wednesday 6th January 2021




What do you notice?

Prompts: yellow and green, 4 dandelions and 3 dandelions, 7 dandelions altogether, small dandelions and bigger dandelions.

Wednesday 6th January 2021

What do you notice? Discuss similarities and differences.

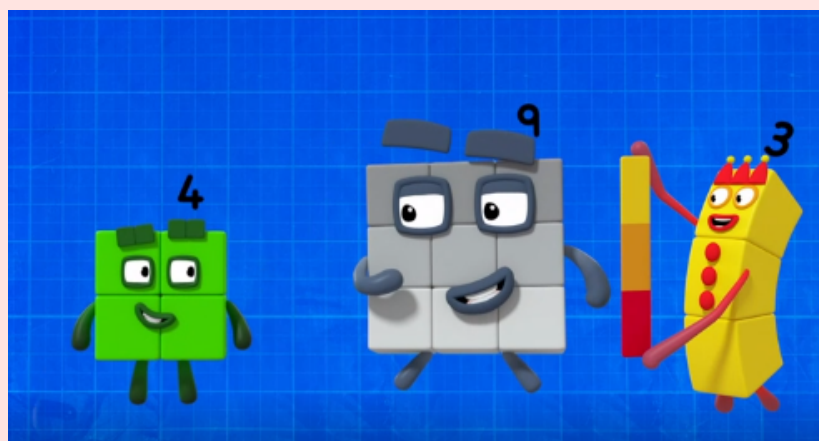
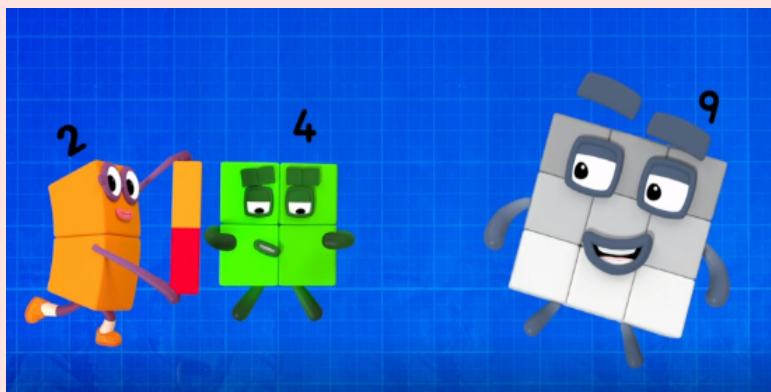


<https://www.bbc.co.uk/iplayer/episode/b08phbzc/numberblocks-series-2-nine>

Both are square - they are as wide as they are tall.  
2 by 2 is 4. 3 by 3 is 9.  
9 is a bigger square than 4.  
4 is smaller than 9.

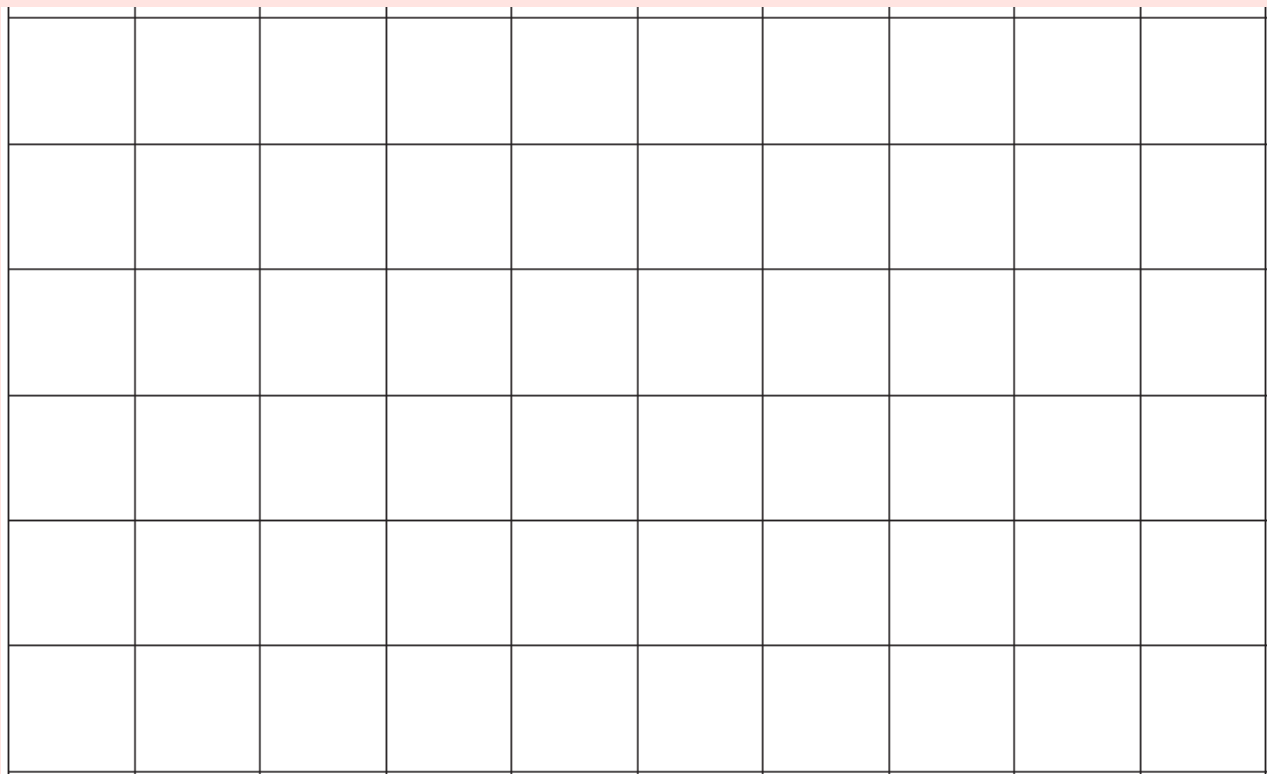
Wednesday 6th January 2021

What do you notice? Discuss similarities and differences.



Wednesday 6th January 2021

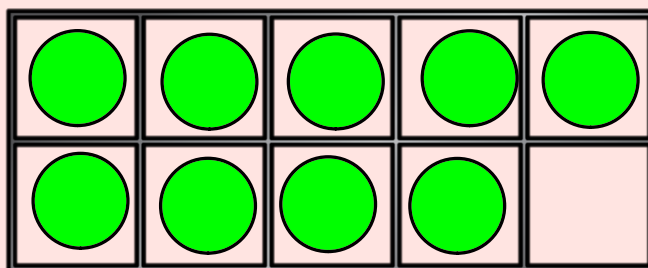
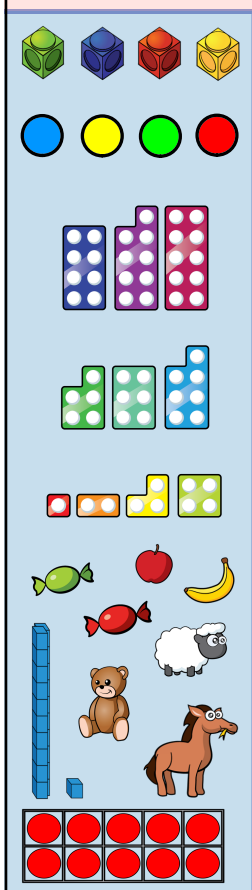
Colour 9 blocks to make a square. What do you notice?



Wednesday 6th January 2021

Show 9 in a different way.


Thursday 7th January 2021

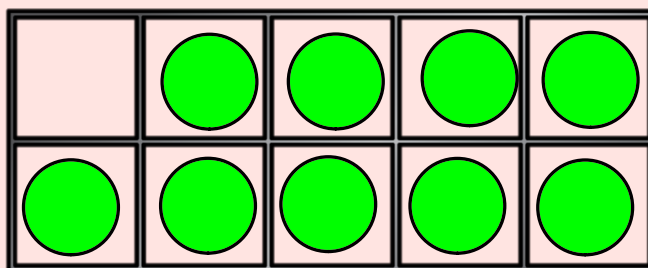
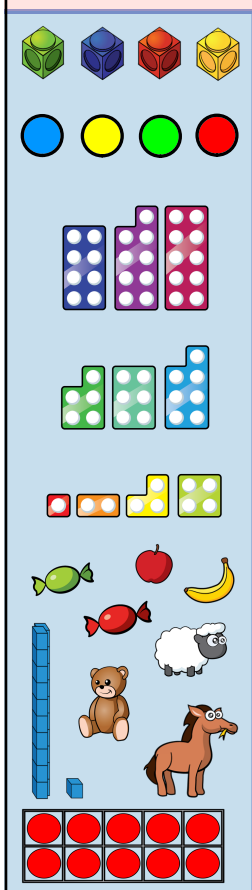


How many counters in the tens frame?

What do you notice?

Prompts: one empty space so it is one less than 10. 5 on top and 4 on the bottom.

Thursday 7th January 2021



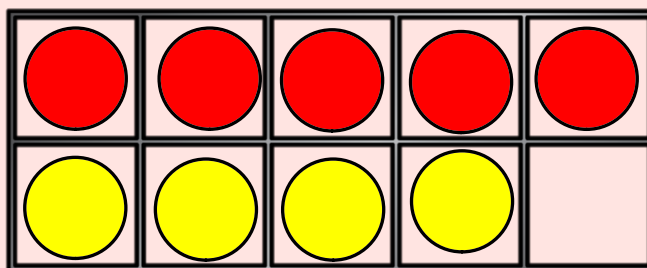
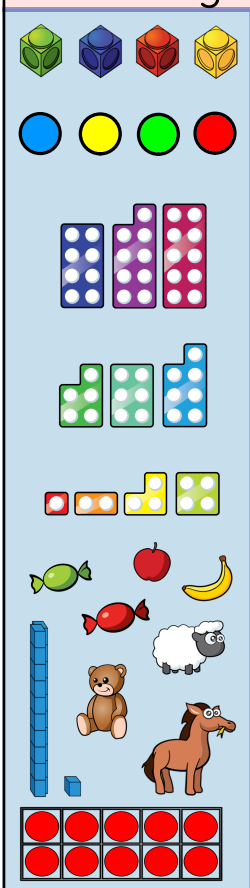
How many counters in the tens frame? (try not to count them!)

How do you know?

Is it the same or different to the last tens frame and why? Encourage them to notice that one empty space means one less than ten which is 9.



Thursday 7th January 2021

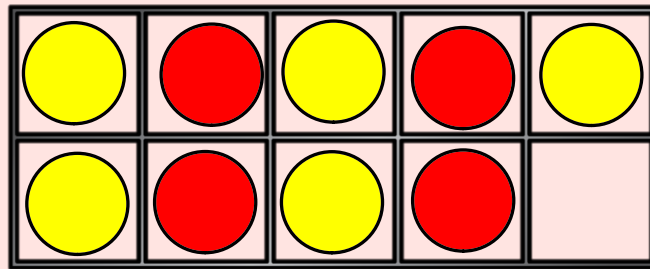



What do you notice?

5 red counters, 4 yellow counters, 9 counters altogether.



Thursday 7th January 2021


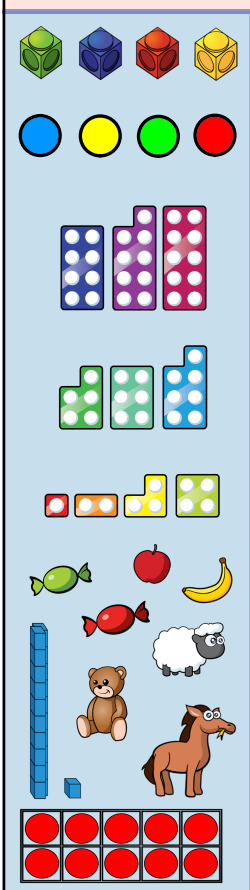


What do you notice?

What similarities or differences compared to last tens frame.

5 yellow counters, 4 red counters, 9 counters altogether.

Thursday 7th January 2021



How can you make 9?


Friday 8th January



What do you notice?

Prompts: 5 eggs, 1 empty space in egg box, 6 spaces in egg box,  $3 + 2 = 5$ , 6 eggs if full.  $3 + 3 = 6$


Friday 8th January



How many children on the bus?


Friday 8th January

Which dinosaur has the most eggs? Which has the least?  
How many altogether?




Friday 8th January

Help the dinosaurs sort their eggs. How many eggs are there?



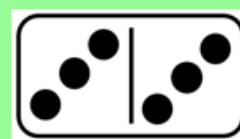
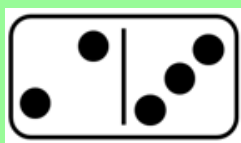


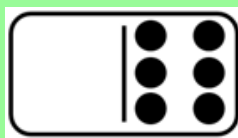

I have 6 eggs.

I have 3 eggs.



Which dinosaur has the most eggs? Which has the least?  
How many altogether?

Friday 8th January



How many? What do you notice?