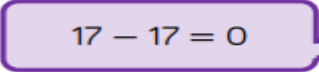

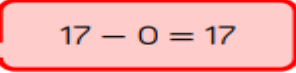

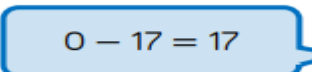



## Challenges for Discussion

These are some questions for discussion that can be used if your child would like an extra challenge. Answers can be recorded on the sheet or written in your exercise book.

Annie, Tommy and Alex are working out which calculation is represented below.

First	Then	Now

  $17 - 17 = 0$   Annie  
  $17 - 0 = 17$   Tommy  
  $0 - 17 = 17$   Alex

Can you work out who is correct?  
Explain why.

.....

.....

.....

.....

.....

.....

.....

.....

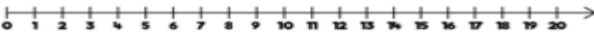
.....

.....

.....

.....

How many ways can you complete this number sentence?  
Use the number line to help you.



-  = 11

.....

.....

.....

.....

.....

.....

.....

.....