

Wednesday 20th January




What do you notice?

Wednesday 20th January

What type of dinosaur do you think it is? why?

How many dinosaurs?



How many footprints?



Wednesday 20th January



Wednesday 20th January




Wednesday 20th January

Challenge time:

If 5 T- rex stomped in the mud, how many footprint would we find?

You could draw or make the footprints to help you. We will see if you are right tomorrow in maths!



Thursday 21st January



What do you notice?

Thursday 21st January

Yesterday I set you a challenge, how many
footprints would we find if 5 T-rex stood
in the mud?



$$5 \text{ lots of } 2 = 10$$

How many gloves
would 3 children need?



How many gloves
would 6 children need?



How many shoes
would 5 children need?



