































Algebra Preparation - Superheroes.

Each symbol is worth a number. Work out the number which the picture stands for. All the symbols in one question are worth the same amount. Use what you have learnt about multiplication and division to help you.

 $+ 4 = 10$ $= \square$	 $+ = 48$ $= \square$	 $\times 4 = 32$ $= \square$
 $\times 8 = 56$ $= \square$	 $\div 9 = 5$ $= \square$	 $\div 8 = 4$ $= \square$
 $\times = 64$ $= \square$	 $\times = 49$ $= \square$	 $\times 5 + 3 = 33$ $= \square$
 $\times 4 + 4 = 10 \times 2$ $= \square$	 $\div 2 + 2 = 9 \times 3$ $= \square$	 $\times 9 = 3 \times 6$ $= \square$
 $\times 5 = 20$ $= \square$	 $8 \times = 72$ $= \square$	 $\times 11 - 6 = 7 \times 7$ $= \square$

Algebra Preparation - Superheroes.

Each symbol is worth a number. Work out the number which the picture stands for. All the symbols in one question are worth the same amount. Use what you have learnt about multiplication and division to help you.

 $+ 4 = 10$ $= \boxed{6}$	 $+ = 48$ $= \boxed{24}$	 $\times 4 = 32$ $= \boxed{8}$
 $\times 8 = 56$ $= \boxed{7}$	 $\div 9 = 5$ $= \boxed{45}$	 $\div 8 = 4$ $= \boxed{32}$
 $\times = 64$ $= \boxed{8}$	 $\times = 49$ $= \boxed{7}$ 😊	 $\times 5 + 3 = 33$ $= \boxed{6}$
 $\times 4 + 4 = 20 \times 2$ $= \boxed{4}$	 $\div 2 + 2 = 27 \times 3$ $= \boxed{50}$	 $\times 9 = 18 \times 3 \times 6$ $= \boxed{2}$
 $\times 5 = 20$ $= \boxed{4}$	 $8 \times = 72$ $= \boxed{9}$	 $\times 11 - 6 = 49 \times 7$ $= \boxed{5}$ 😊