

1) $634 + 83920 =$

2) $76 \times 21 =$

3) $7^2 + 50 =$

4) $2^3 =$

5) $4/5$ of $80 =$

6) $8002 - 352 =$

7) $3/4 \times 1/2 =$

8) $7 - 5.63 =$


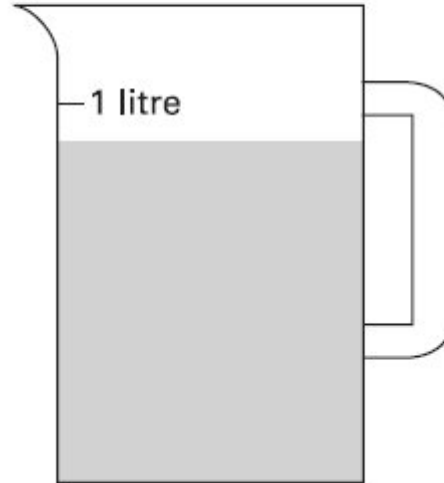
9) $45 \times 2 = 6372 - \underline{\hspace{2cm}}$

10) Find the area and perimeter of a square with sides of 15cm.

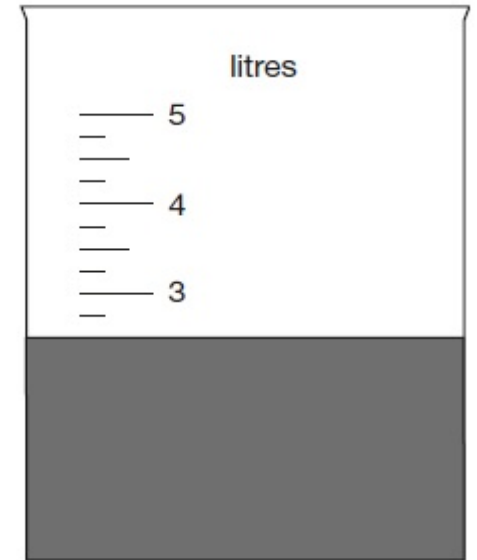
Sophie poured some water out of a **litre** jug.

Look how much is left in the jug.

Estimate how many millilitres of water are left.




Jack pours some dark paint into a container.



In litres, how much paint is in the container?

This is a diagram of a vegetable garden.

It shows the fractions of the garden planted with potatoes and cabbages.



Not to scale

The remaining area is planted with carrots.

What **fraction** of the garden is planted with carrots?

1) $634 + 83920 = 84554$

2) $76 \times 21 = 1596$

3) $7^2 + 50 = 99$

4) $2^3 = 8$

5) $4/5$ of $80 = 64$

6) $8002 - 352 = 7650$

7) $3/4 \times 1/2 = 3/8$

8) $7 - 5.63 = 1.37$

9) $45 \times 2 = 6372 - 6282$

10) Find the area and perimeter of a square with sides of 15cm.


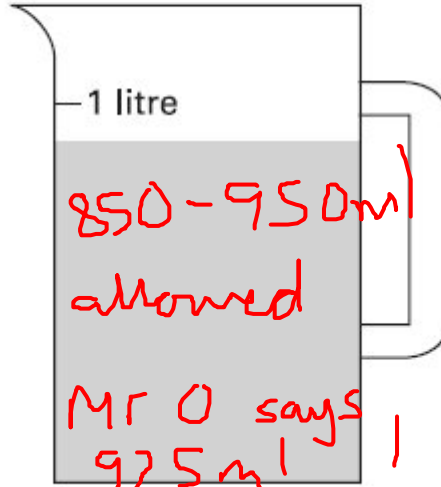
$A = 225 \text{ cm}^2$

$P = 60 \text{ cm}$

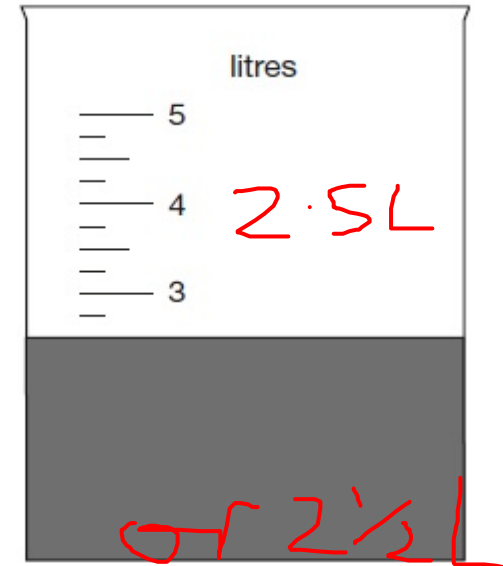
Sophie poured some water out of a **litre** jug.

Look how much is left in the jug.

Estimate how many millilitres of water are left.




Jack pours some dark paint into a container.



In litres, how much paint is in the container?

This is a diagram of a vegetable garden.

It shows the fractions of the garden planted with potatoes and cabbages.



Not to scale

The remaining area is planted with carrots.

What **fraction** of the garden is planted with carrots?

$\leftarrow \frac{1}{12}$